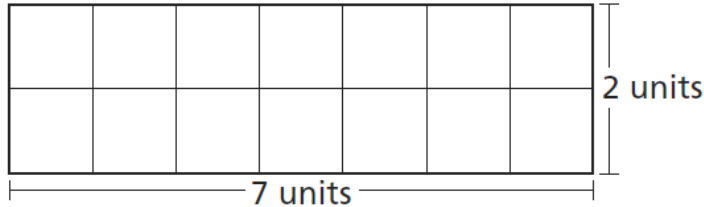


### Pre-Assessment Survey

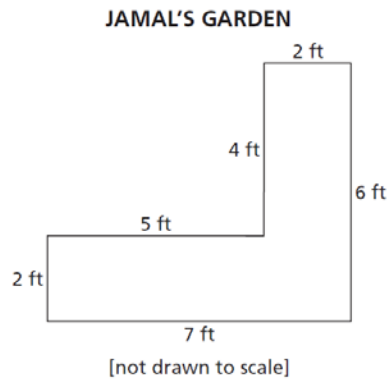
1. Jenny makes the bookmark shown below.



What is the perimeter, in units, of the bookmark? \_\_\_\_\_ units

Show your work.

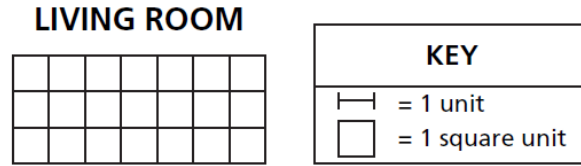
2. Jamal is building a brick border around his garden, as shown below.



What is the perimeter, in feet, of Jamal's garden? \_\_\_\_\_ feet

Show your work.

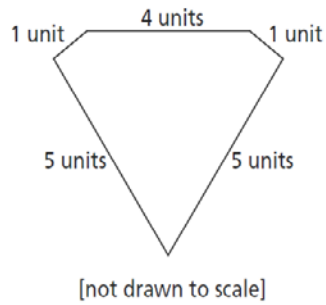
3. Tony drew the diagram of his living room floor shown below.



What is the perimeter, in units, of the living room floor? \_\_\_\_\_ units

Show your work.

4. Abigail drew the figure below.



What is the perimeter, in units, of the figure?

- A** 5
- B** 6
- C** 10
- D** 16